



UNIVERSITY OF CAMBRIDGE INTERNATIONAL EXAMINATIONS  
International General Certificate of Secondary Education

CANDIDATE  
NAME

CENTRE  
NUMBER

--	--	--	--	--

CANDIDATE  
NUMBER

--	--	--	--

**PHYSICS**

**0625/06**

Paper 6 Alternative to Practical

**May/June 2009**

**1 hour**

Candidates answer on the Question Paper.  
No Additional Materials are required.

**READ THESE INSTRUCTIONS FIRST**

Write your Centre number, candidate number and name on all work you hand in.  
Write in dark blue or black pen.  
You may use a pencil for any diagrams, graphs or rough working.  
Do not use staples, paper clips, highlighters, glue or correction fluid.  
**DO NOT WRITE IN ANY BARCODES.**

Answer **all** questions.

At the end of the examination, fasten all your work securely together.  
The number of marks is given in brackets [ ] at the end of each question or part question.

For Examiner's Use	
<b>1</b>	
<b>2</b>	
<b>3</b>	
<b>4</b>	
<b>5</b>	
<b>Total</b>	

This document consists of **11** printed pages and **1** blank page.



- 1 An IGCSE student is making measurements as accurately as possible in order to determine the density of glass.

For  
Examiner's  
Use

Fig. 1.1 shows a glass test-tube drawn actual size.

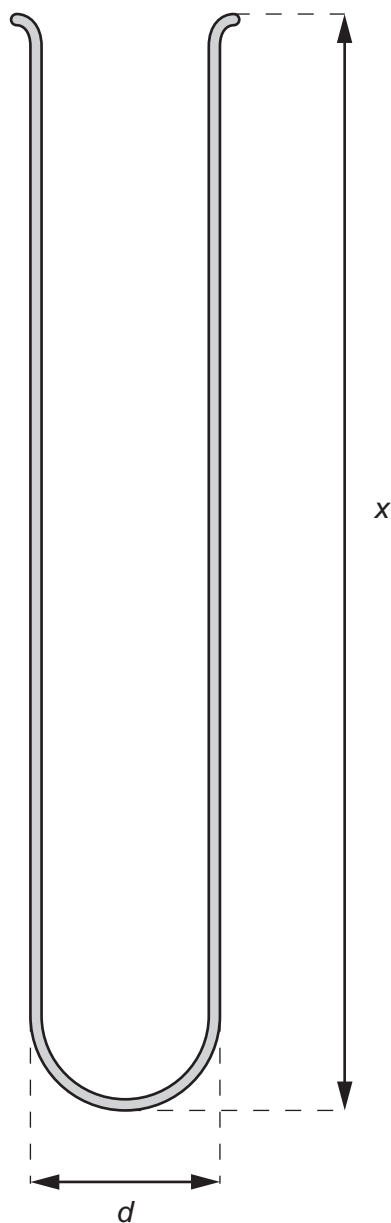


Fig. 1.1

- (a) (i) Use your rule to measure, in cm, the external diameter  $d$  of the test-tube.

$d = \dots\dots\dots$  cm

3

- (ii) Use your rule to measure, in cm, the length  $x$  of the test-tube.

$x =$  .....

For  
Examiner's  
Use

- (iii) Draw a labelled diagram to show how you would use two rectangular blocks of wood and your rule to measure the length  $x$  of the test-tube as accurately as possible.

[4]

- (b) The mass  $m$  of the test-tube is 31.2 g.

- (i) Calculate the external volume  $V_e$  of the test-tube using the equation

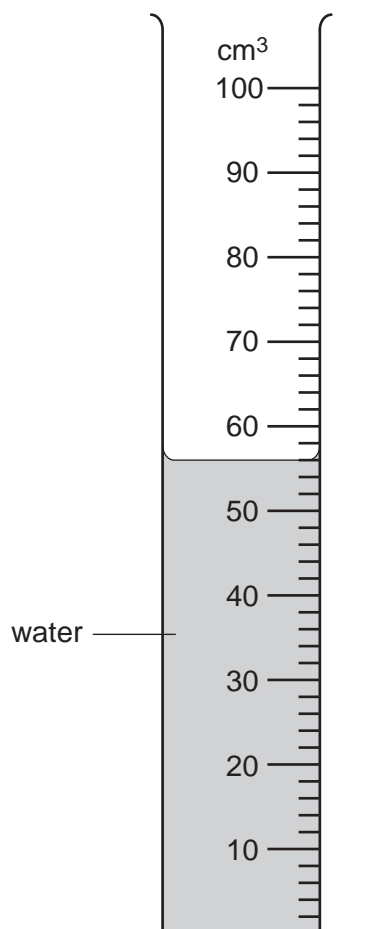
$$V_e = \frac{\pi d^2 x}{4} .$$

$V_e =$  .....

4

- (ii) The student then fills the test-tube with water and pours the water into a measuring cylinder. Fig. 1.2 shows the measuring cylinder.

For  
Examiner's  
Use



**Fig. 1.2**

Record the volume reading  $V_i$  from the measuring cylinder. This is the internal volume of the test-tube.

$V_i = \dots\dots\dots$

- (iii) Calculate the density  $\rho$  of the glass from which the test-tube is made using the equation

$$\rho = \frac{m}{(V_e - V_i)}$$

$\rho = \dots\dots\dots$  [4]

[Total: 8]

**BLANK PAGE**

- 2 The IGCSE class is investigating the cooling of thermometer bulbs under different conditions.

The students are provided with two thermometers **A** and **B**. Thermometer **B** has cotton wool wrapped around the bulb. Fig. 2.1 shows thermometer **A**.

For  
Examiner's  
Use

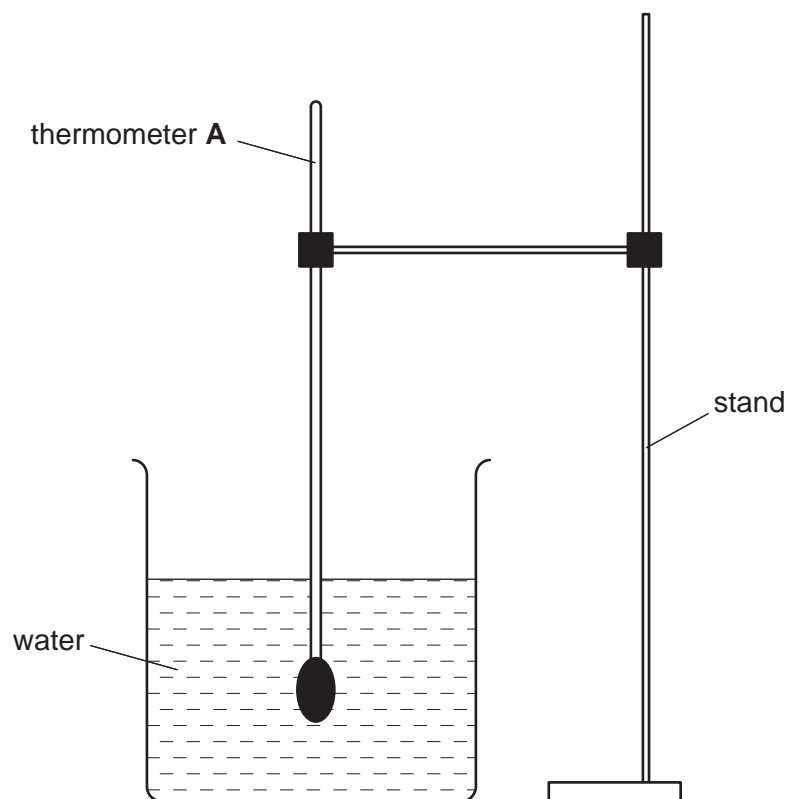


Fig. 2.1

The students measure the temperature  $\theta$  of the hot water in the beaker. Fig. 2.2 shows the thermometer reading.



thermometer A

Fig. 2.2

- (a) Record in Table 2.1 at time  $t = 0$  s the temperature  $\theta$  shown in Fig. 2.2.
- (b) The students remove the thermometer from the water, starting the stopclock at the same time. Table 2.1 shows the temperature of the thermometer bulb at 30 s intervals. The experiment is repeated using thermometer **B** which has cotton wool wrapped around the thermometer bulb.

Complete Table 2.1 by inserting the appropriate unit in the time and in the temperature column headings.

For  
Examiner's  
Use

**Table 2.1**

	Thermometer A	Thermometer B
$t/$	$\theta/$	$\theta/$
0		81
30	51	72
60	43	58
90	37	49
120	34	43
150	30	38
180	28	34
210	27	31

[2]

- (c) Suggest which thermometer cooled more quickly at first. Justify your answer by reference to the readings.

statement .....

justification .....

..... [2]

- (d) To make a fair comparison between the rates of cooling of the two thermometer bulbs under different conditions (in this experiment one thermometer bulb is covered with cotton wool), it is important to control other experimental conditions. Suggest two conditions that should be controlled in this experiment.

1. ....

2. .... [2]

[Total: 6]

- 3 The IGCSE class is investigating the resistance of a wire.

The circuit is shown in Fig. 3.1.

For  
Examiner's  
Use

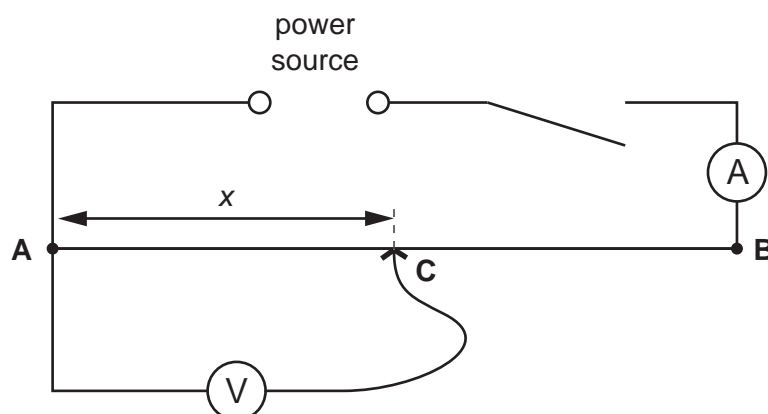


Fig. 3.1

**AB** is a resistance wire. The students place the sliding contact **C** on the resistance wire **AB** at a distance  $x = 0.100\text{ m}$  from **A**. They switch on and measure the p.d.  $V$  across the wire between **A** and **C**. They also measure the current  $I$  in the wire. The value of  $I$  is  $0.38\text{ A}$ .

They repeat the procedure several times using different values of  $x$ . The readings are shown in Table 3.1. The current  $I$  is  $0.38\text{ A}$  for each value of  $x$ .

Table 3.1

$x/\text{m}$	$V/\text{V}$	$R/\Omega$
0.100	0.21	
0.300	0.59	
0.500	1.04	
0.700	1.42	
0.900	1.87	


[2]

- (a) Calculate the resistance  $R$  of the section **AC** of the wire for each value of  $x$  using the equation  $R = \frac{V}{I}$ . Record the values of  $R$  in the table.



- (b) Use the results in Table 3.1 to plot a graph of  $R/\Omega$  ( $y$ -axis) against  $x/m$  ( $x$ -axis). Draw the best fit line.

For  
Examiner's  
Use



[5]

- (c) Within the limits of experimental accuracy, what do you conclude about the variation of resistance with distance along the wire? Justify your conclusion by reference to your graph.

statement .....

justification .....

..... [2]

- (d) Using your graph, determine the value for  $R$  when  $x = 0.750\text{m}$ . Show clearly on your graph how you obtained the necessary information.

$R = \dots\dots\dots$  [2]

- (e) A variable that may be difficult to control in this experiment is the heating effect of the current, which affects the resistance of the wire. Suggest how you would minimise the heating effect.

.....

..... [1]

[Total: 12]

- 4 An IGCSE student is determining the focal length of a lens.

Fig. 4.1 shows the experimental set-up. The student positions the illuminated object and the lens and then moves the screen away from the lens until a sharply focused image of the object is formed on the screen.

For  
Examiner's  
Use

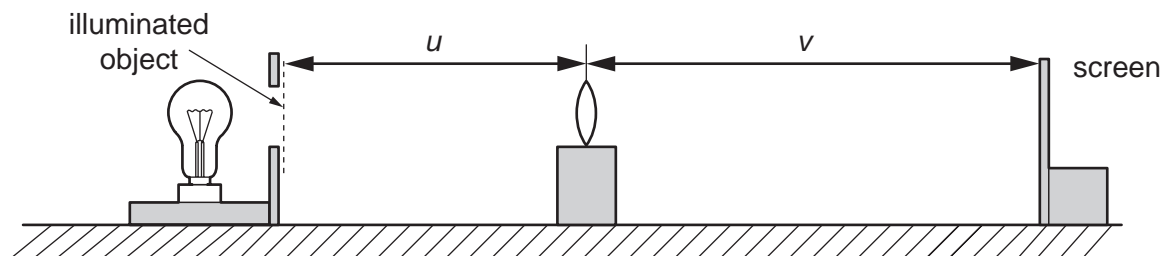


Fig. 4.1

- (a) Using your rule, measure on Fig. 4.1 the distance  $u$ , in cm, from the centre of the lens to the illuminated object and the distance  $v$  from the centre of the lens to the screen.

$u = \dots\dots\dots$

$v = \dots\dots\dots$  [2]

- (b) (i) Fig. 4.1 is drawn one fifth actual size. Calculate the actual distance  $x$  from the illuminated object to the centre of the lens and the actual distance  $y$  from the centre of the lens to the screen.

Record these values in Table 4.1. The first pair of readings obtained by the student has already been entered in the table.

Table 4.1

$x/\text{cm}$	$y/\text{cm}$	$f/\text{cm}$
57.0	15.0	

[3]

- (ii) Calculate for both pairs of readings the focal length  $f$  of the lens using the equation

$$f = \frac{xy}{(x + y)}.$$

Record the values of  $f$  in Table 4.1.

(c) Calculate the average value of the focal length.

For  
Examiner's  
Use

average value for the focal length = ..... [2]

(d) State two precautions you would take in the laboratory in order to obtain reliable measurements.

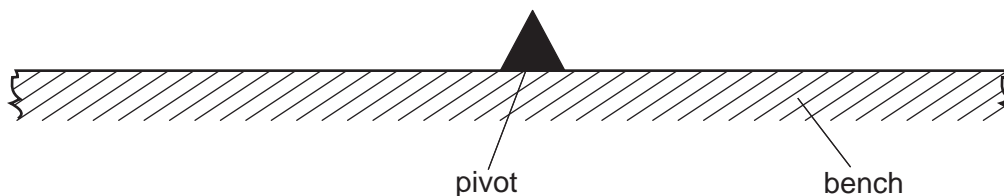
1. ....

2. .... [2]

[Total: 9]

- 5 An IGCSE student is investigating moments using a simple balancing experiment. He uses a pivot on a bench as shown in Fig. 5.1.

For  
Examiner's  
Use



**Fig. 5.1**

First, the student balances the metre rule, without loads, on the pivot. He finds that it does not balance at the 50.0 cm mark, as he expects, but it balances at the 49.7 cm mark.

Load **Q** is a metal cylinder with diameter a little larger than the width of the metre rule, so that it covers the markings on the rule. Load **Q** is placed carefully on the balanced metre rule with its centre at the 84.2 cm mark. The rule does not slip on the pivot.

- (a) Draw on Fig. 5.1 the metre rule with load **Q** on it. [2]
- (b) Explain, using a labelled diagram, how the student would ensure that the metre rule reading at the centre of **Q** is 84.2 cm. [2]

- (c) Calculate the distance between the pivot and the centre of load **Q**.

distance = ..... [1]  
[Total: 5]

Permission to reproduce items where third-party owned material protected by copyright is included has been sought and cleared where possible. Every reasonable effort has been made by the publisher (UCLES) to trace copyright holders, but if any items requiring clearance have unwittingly been included, the publisher will be pleased to make amends at the earliest possible opportunity.

University of Cambridge International Examinations is part of the Cambridge Assessment Group. Cambridge Assessment is the brand name of University of Cambridge Local Examinations Syndicate (UCLES), which is itself a department of the University of Cambridge.